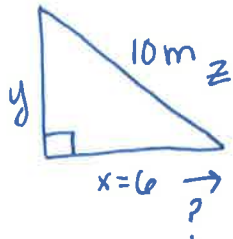


I Falling Ladder

$-10 \text{ m/s} \downarrow$



$$x^2 + y^2 = z^2$$

$$2x \frac{dx}{dt} + 2y \frac{dy}{dt} = 2z \frac{dz}{dt}$$

$$2(6) \frac{dx}{dt} + 2(8)(-10) = 2(10)(0)$$

$$12 \frac{dx}{dt} - 160 = 0$$

$$12 \frac{dx}{dt} = 160 \quad \frac{dx}{dt} = 13\frac{1}{3} \text{ m/s}$$

$$6^2 + y^2 = 10^2$$


$$36 + y^2 = 100$$

$$y^2 = 64$$

$$y = 8$$

The ladder is sliding out at $13\frac{1}{3}$ m/s

II Leaky Container



$$\frac{dV}{dt} = 2 \text{ ft}^3/\text{min}$$

$$\frac{d(SA)}{dt} = ?$$

$$V = \frac{4}{3}\pi r^3$$

$$SA = 4\pi r^2$$

$$\frac{dV}{dt} = 4\pi r^2 \frac{dr}{dt}$$

$$\frac{d(SA)}{dt} = 8\pi r \frac{dr}{dt}$$

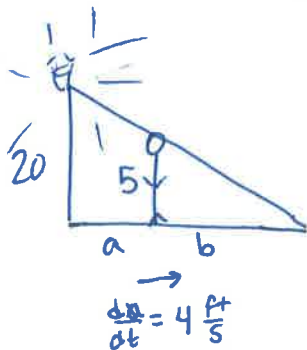
$$-2 = 4\pi (12)^2 \frac{dr}{dt}$$

$$\frac{dr}{dt} = -\frac{1}{288\pi}$$

$$\frac{d(SA)}{dt} = 8\pi (12) \left(-\frac{1}{288\pi}\right) = -\frac{1}{3} \text{ ft}^2/\text{min}$$

The surface area is shrinking at $1 \text{ ft}^2/\text{min}$

III



$$a + b = x$$

a = distance from street light to person

b = shadow length

x = distance to shadow tip from street light

$$x = a + \frac{1}{3}a = \frac{4}{3}a$$

$$\frac{dx}{dt} = \frac{4}{3} \frac{da}{dt}$$

$$\frac{dx}{dt} = \frac{4}{3}(4) = \frac{16}{3} \text{ ft/sec}$$

$$b = \frac{1}{3}a$$

$$\frac{db}{dt} = \frac{1}{3} \frac{da}{dt}$$

$$\frac{db}{dt} = \frac{1}{3}(4) = \frac{4}{3} \text{ ft/sec}$$

$$\frac{5}{b} = \frac{20}{a+b}$$

$$5a + 5b = 20b$$

$$5(a+b) = 20b$$

$$b = \frac{1}{3}a$$

The tip of the shadow is changing at $16 \text{ ft}/3 \text{ sec}$.

The shadow length is changing at $4 \text{ ft}/3 \text{ sec}$.

$$1. \quad a^2 = b^2 + 4b + c^2$$

$$2a \frac{da}{dt} = 2b \frac{db}{dt} + 4 \frac{db}{dt} + 2c \frac{dc}{dt}$$

$$2(3) \frac{da}{dt} = 2(1)(2) + 4(2) + 2(2)(3)$$

$$6 \frac{da}{dt} = 4 + 8 + 12$$

$$\frac{da}{dt} = 4$$

$$a^2 = b^2 + 4b + c^2$$

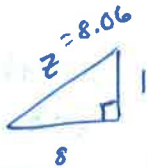
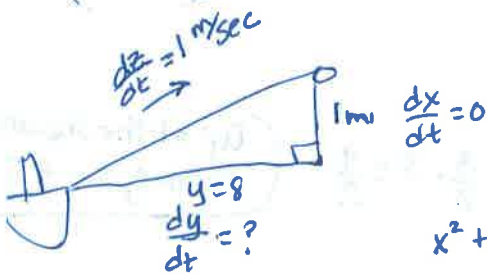
$$a^2 = 1^2 + 4(1) + (2)^2$$

$$a^2 = 1 + 4 + 4$$

$$a^2 = 9$$

$$a = 3$$

2.



$$1^2 + 8^2 = z^2$$

$$1 + 64 = z^2$$

$$65 = z^2$$

$$8.06 = z$$

$$x^2 + y^2 = z^2$$


$$2x \frac{dx}{dt} + 2y \frac{dy}{dt} = 2z \frac{dz}{dt}$$

$$2(1)(0) + 2(8) \frac{dy}{dt} = 2(8.06)(1)$$

$$16 \frac{dy}{dt} = 16.12$$

$$\frac{dy}{dt} = 1.0075 \text{ m/sec}$$

3.



$$\frac{dV}{dt} = -3 \frac{\text{in}^3}{\text{min}}$$

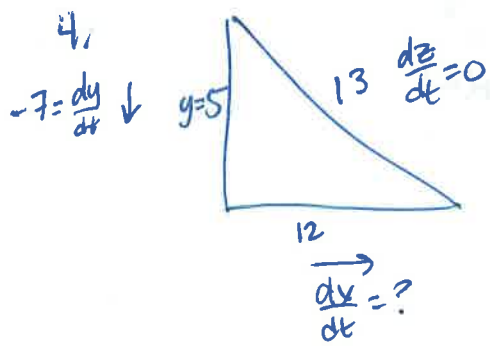
$$\frac{dh}{dt} = ?$$

$$V = \pi r^2 h$$

$$\frac{dV}{dt} = 2\pi r \frac{dr}{dt} h + \pi r^2 \frac{dh}{dt}$$

$$-3 = 0 + \pi (10)^2 \frac{dh}{dt}$$

$$\frac{dh}{dt} = -0.00954 \text{ in/min}$$



$$5^2 + x^2 = 13^2$$

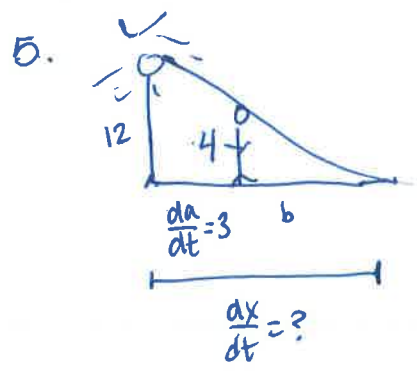
$$x = 12$$

$$x^2 + y^2 = z^2$$

$$2x \frac{dx}{dt} + 2y \frac{dy}{dt} = 2z \frac{dz}{dt}$$

$$2(12) \frac{dx}{dt} + 2(5)(-7) = 2(13)(0)$$

$\frac{dx}{dt} = 2.917 \text{ ft/sec}$ sliding ladder across the floor



$$\frac{4}{b} = \frac{12}{a+b}$$

$$x = a+b$$

$$x = a + \frac{1}{2}a$$

$$x = \frac{3}{2}a$$

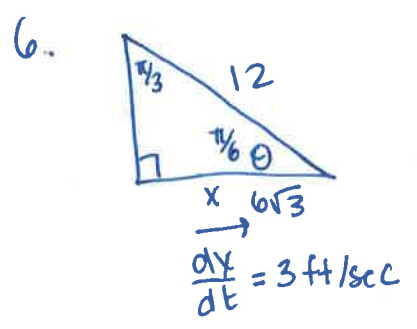
$$4a + 4b = 12b$$

$$4a = 8b$$

$$b = \frac{1}{2}a$$

$$\frac{dx}{dt} = \frac{3}{2} \cdot \frac{da}{dt} = \frac{3}{2} \cdot 3 = \frac{9}{2}$$

tip of the shadow is moving at 4.5 ft/sec



$$\frac{d\theta}{dt} = ?$$

$$\cos \theta = \frac{x}{12}$$

$$-\sin \theta \frac{d\theta}{dt} = \frac{1}{12} \frac{dx}{dt}$$

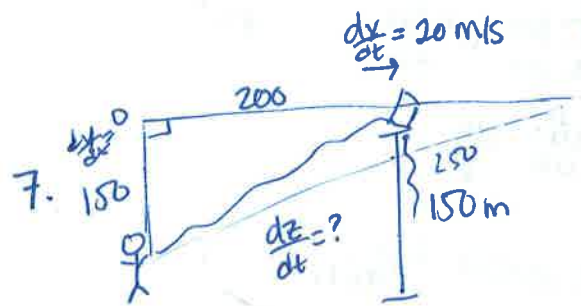
$$-\sin\left(\frac{\pi}{6}\right) \frac{d\theta}{dt} = \frac{1}{12} (3)$$

$$-\sin\left(\frac{\pi}{6}\right) \frac{d\theta}{dt} = \frac{1}{4}$$

$$-\frac{1}{2} \frac{d\theta}{dt} = \frac{1}{4}$$

$$\frac{d\theta}{dt} = -\frac{1}{2} \text{ rad/sec}$$

$-\frac{1}{2} \text{ rad/sec}$



$$x^2 + y^2 = z^2$$

$$150^2 + y^2 = 250^2$$

$$22500 + y^2 = 62500$$

$$y = 200$$

$$x^2 + y^2 = z^2$$

$$2x \frac{dx}{dt} + 2y \frac{dy}{dt} = 2z \frac{dz}{dt}$$

$$2(200)(20) + 2(150)(0) = 2(250) \frac{dz}{dt}$$

$$8000 = 500 \frac{dz}{dt}$$

16 m/sec string being released

PART II: Related Rates

Related rates problems can be identified by their request for finding **how quickly some quantity is changing** when you are given how quickly another variable is changing. There exist a few classic *types* of related rates problems with which you should familiarize yourself.

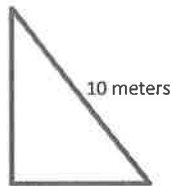
1. The Falling Ladder (and other Pythagorean Problems)
2. The Leaky Container
3. The Lamppost and the Shadow
4. The Change in Angle Problem

Example 1: "The Falling Ladder"

A ladder is sliding down along a vertical wall. If the ladder is 10 meters long and the top is slipping at the constant rate of 10 m/s, how fast is the bottom of the ladder moving along the ground when the bottom is 6 meters from the wall?

SOLUTION:

$$\frac{dy}{dt} = -10 \text{ m/s} \downarrow$$



The relevant equation

$$\frac{dx}{dt} = ? \rightarrow \text{when } x = 6 \text{ meters}$$

here is the Pythagorean Theorem:

$a^2 + b^2 = c^2$ Note that the base is x and the height is y $\therefore x^2 + y^2 = 10^2$ is our equation.

Implicitly differentiating this yields

$$2x \frac{dx}{dt} + 2y \frac{dy}{dt} = 0 \text{ Plug in all known values.}$$

$$\text{Hence, } \frac{dx}{dt} = \frac{160}{12} = 13 \frac{1}{3} \text{ m/s}$$

STEPS:

1. As you read the problem pull out essential information & make a diagram if possible.
2. Write down any known rate of change & the rate of change you are looking for, e.g.

$$\frac{dV}{dt} = 3 \quad \& \quad \frac{dr}{dt} = ?$$
3. Be careful with signs...if the amount is decreasing, the rate of change is negative.
4. Pay attention to whether quantities are fixed or varying. For example, if a ladder is 12 meters long you can just call it 12. And if a radius is changing a changing rate, just call it r . You will plug in values for varying quantities at the end.
5. Set up an equation involving the appropriate quantities.
6. Differentiate with respect to t using implicit differentiation.
7. Plug in known items (you may need to find some quantities using geometry).
8. Solve for the item you are looking for, most often this will be a rate of change.
9. Express your final answer in a full sentence with units that answers the question asked.

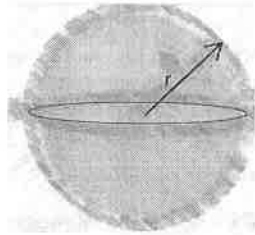
To find the height of the ladder when the bottom of the ladder is 6 meters from the base of the building, we use the Pythagorean Theorem.

$$6^2 + y^2 = 10^2 \text{ yields } y = 8.$$

$$2(6) \frac{dx}{dt} + 2(8)(-10) = 0$$

Example 2: "The Leaky Container"

Gas is escaping from a spherical balloon at the rate of 2 cubic feet per minute. How fast is the surface area shrinking when the radius of the balloon is 12 feet? [Note: 1 ft³ = 7.5 gallons]



SOLUTION:

First, we identify the related rates, that is, the two values that are changing together - the change of volume and the change of the surface area (ΔV and ΔSA respectively) and state the formula for each:

Therefore, beginning with $V = \frac{4}{3}\pi r^3$ and $SA = 4\pi r^2$, we take the derivative of each to obtain the change of rate for each:

$$\text{So we have: } \frac{dV}{dt} = 4\pi r^2 \frac{dr}{dt} \quad (1) \quad \text{and} \quad \frac{d(SA)}{dt} = 8\pi r \frac{dr}{dt} \quad (2)$$

We are given $\frac{dV}{dt}$ and we are looking for $\frac{d(SA)}{dt}$. If we knew the value of $\frac{dr}{dt}$, then we would be done.

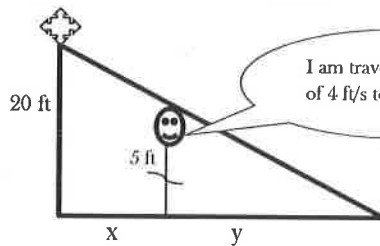
So how do we find $\frac{dr}{dt}$? We look at what we are given and what we now need to know. Using equation (1), and the fact that we are given values for the change of volume and the radius, we find that $\frac{dr}{dt} = \frac{1}{288\pi}$. Now, the known information into equation (2), we obtain

$$\frac{d(SA)}{dt} = 8\pi r \frac{dr}{dt} = 8\pi(12) \left(\frac{1}{288\pi}\right) = \frac{1}{3} \text{ ft/min}$$

Example 3: "The Lamppost and the Shadow"

A boy 5 feet tall walks at the rate of 4 ft/s directly away from a street light which is 20 feet above the street.
(a) At what rate is the tip of his shadow changing? (b) At what rate is the length of his shadow changing?

SOLUTION:



$$\frac{20}{x+y} = \frac{5}{y}$$

$$\therefore 20y = 5(x+y)$$

$$\text{Hence } y = \frac{1}{3}x$$

The setup for this problem is *similar triangles*. The tip of the shadow is at the end of the base $x + y$. Let $L = x + y$. The related rates for part (a) are the boy's walking and the rate the tip of his shadow is changing, $\frac{dx}{dt}$ and $\frac{dL}{dt}$, respectively. Note that $L = x + y = x + \frac{1}{3}x = \frac{4}{3}x$. Differentiating both sides yields $\frac{dL}{dt} = \frac{4}{3} \frac{dx}{dt} = \frac{4}{3}(4) = \frac{16}{3}$ ft/s. The related rates for part (b) are the boy's walking and the length of the shadow, $\frac{dx}{dt}$ and $\frac{dy}{dt}$, respectively. Differentiating $y = \frac{1}{3}x$ yields $\frac{dy}{dt} = \frac{1}{3} \frac{dx}{dt} = \frac{1}{3}(4) = \frac{4}{3}$ ft/s.

Now you try some:

1. If $a^2 = b^2 + 4b + c^2$, $\frac{db}{dt} = 2$, $\frac{dc}{dt} = 3$, find $\frac{da}{dt}$ when $b = 1$ and $c = 2$.
(Assume $a > 0$)
2. A boat is pulled by a rope, attached to the bow of the boat, and passing through a pulley on a dock that is 1 meter higher than the bow of the boat. If the rope is pulled in at a rate of 1 m/sec, how fast is the boat approaching the dock when it is 8 meters from the dock?
3. A cylinder with a height of 5 ft and a base radius of 10 in is filled with water. The water is being drained out at a rate of 3 cubic inches per minute. How fast is the water level decreasing?
4. A 13-foot ladder propped up against a wall is sliding downward such that the rate at which the top of the ladder is falling to the floor is 7 ft/sec. Find the rate at which the distance between the bottom of the ladder and the base of the wall is increasing when the top of the ladder is 5 ft from the base of the wall.
5. A street light is mounted at the top of a 12 ft pole. A 4 ft child walks away from the pole at a speed of 3 ft/sec. How fast is the tip of her shadow moving?
6. A 12-foot ladder is propped up against a wall. If the bottom of the ladder slides away from the wall at a rate of 3 ft/sec, how fast is the measure of the angle between the bottom of the ladder and the floor changing when the angle between the top of the ladder and the wall measures $\pi/3$ radians?
7. A girl is flying a kite at a height of 150 meters. If the kite moves horizontally away from the girl at the rate of 20 m/s, how fast is the string being released when the kite is 250 meters from the girl?

Solutions:

Now You Try Some: Implicit Differentiation Solutions

$$1a) \frac{dy}{dx} = -\frac{x}{y}$$

$$1b) \frac{dy}{dx} = \frac{5y-7y^2-3}{14xy-5x+2}$$

$$1c) \frac{dy}{dx} = \frac{2e^{2x+2y}-y \cos(xy)}{x \cos(xy)-2e^{2x+2y}}$$

$$1d) \frac{dy}{dx} = \frac{\sec(x+y) \tan(x+y) - 3(2x+y)}{3x - \sec(x+y) \tan(x+y)}$$

$$2) \frac{dy}{dx} = \frac{8x+4y}{6y^2-4x} \quad \text{and} \quad y = \frac{2}{25}x + \frac{102}{25}$$

$$3) \frac{dy}{dx} = \frac{8x+5-y}{x} = \frac{33}{2}$$

Now You Try Some: Related Rates Solutions

$$1) \frac{da}{dt} = 4$$

$$2) 1.0078 \text{ m/sec}$$

$$3) -0.000159 \text{ in/sec}$$

$$4) 2.917 \text{ ft/sec}$$

$$5) 4.5 \text{ ft/sec}$$

$$6) -1/2 \text{ rad/sec}$$

$$7) 16 \text{ m/sec}$$